

Thakur Educational Trust's (Regd.)  
**THAKUR VIDYA MANDIR HIGH SCHOOL & JUNIOR COLLEGE**  
**II Terminal Examination 2016-17**  
**Subject : English**

Std: III  
DATE - 30/01/2017

MARKS: 80  
Time : 2.45 hrs

**QIA] Fill in the blanks :**

**(6)**

- 1) The rains \_\_\_\_\_ and the weather became \_\_\_\_\_.
- 2) The Captain ordered his men to set sail \_\_\_\_\_.
- 3) The cock flew to the top of the tree to look for \_\_\_\_\_.
- 4) The \_\_\_\_\_ of a robot can be compared to the eyes, ears, nose, etc. of a human being.
- 5) The king was extremely fond of \_\_\_\_\_.
- 6) The \_\_\_\_\_ is the largest of all animals in the sea.

**B] Match the columns :**

**(5)**

- | <b>A</b>        | <b>B</b>            |
|-----------------|---------------------|
| 1) frogs        | a) screech          |
| 2) generous     | b) mechanical parts |
| 3) owls         | c) very kind        |
| 4) worthless    | d) leap             |
| 5) robot's body | e) having no value  |

**C] State whether the following statements are true or false:**

**(5)**

- 1) The ocean floor is flat.
- 2) The stag pushed the king into the pit.
- 3) The four musicians never went to Bremen.
- 4) The two frogs were very close friends.
- 5) The girl thought she would become a hermit.

**D] Write the following things from the smallest to the biggest:**

**(2)**

- 1) seeds – container – house – kitchen – dried chilli
- 2) grain of corn – field – plant – stalk – ear of corn

**E] Name the following:**

**(2)**

- 1) A person at the court of a king –
- 2) A person who boxes -

**QII A] Write the opposites of :**

**(6)**

- 1) strange x
- 2) possible x
- 3) open x
- 4) best x
- 5) friends x
- 6) ever x

**B] Write a rhyming word for the following :**

**(6)**

- 1) look -
- 2) grow -
- 3) keep -
- 4) know -
- 5) hop -
- 6) hold -

**C] Frame a sentence of your own with the help of the following phrases :**

**(4)**

- 1) depend on -
- 2) jump for joy -
- 3) at a distance -
- 4) as soon as -

**D] Answer the following questions in one word :**

**(4)**

- 1) Who is left behind in the school?
- 2) Where does the blue whale live?
- 3) Name any one part of a robot.
- 4) What is the ocean called in the poem, 'Washday'?

**QIII A] Add '-ly' to the following words :**

**(4)**

- 1) severe -
- 2) lucky -
- 3) quiet -
- 4) glad -

**B] Use two or more letters from the given words to make two other words :**

**(4)**

- 1) national -
- 2) immediately -
- 3) motherland -
- 4) exhausted -

**C] Answer the following questions in one sentence each :**

**(6)**

- 1) What does the belly do ?
- 2) What is the teacher like ?
- 3) Who were the musicians ?
- 4) Why did the king set off into the forest ?
- 5) What does Mrs. Ocean do everyday ?
- 6) What did the merchants sell?

**D] Answer the following questions in brief :**

**(6)**

- 1) What work does the teacher do at home ?
- 2) What do all the other body parts decide ?
- 3) What do the children do when school is over for the day ?

## **Grammar**

**QIV A] Do as directed :**

**(13)**

- 1) The cat is sitting \_\_\_\_\_ the table.

[Fill in the blank with a suitable preposition]

- 2) My father's friend has a very big house.

[Underline the subject in the above sentence]

- 3) Raju does not have enough money to buy an ice-cream.

[Rewrite the above sentence using the short form of the underlined word]

4) I like mangoes. I like strawberries.

[Rewrite the above sentence using a suitable conjunction]

5) Fill in the blanks with suitable articles.

(i) I have \_\_\_\_\_ beautiful dress.

(ii) I helped \_\_\_\_\_ old lady to cross the road.

6) this sunday will we beach juhu the to go

[Rearrange the words and rewrite the above sentence using proper punctuation]

7) Write the correct adjective forms in the blanks :

fat \_\_\_\_\_

8) Write the past tense form of the following verbs :

(i) drink -

(ii) show -

9) Rajasthan \_\_\_\_\_ many historical places. (has/have)

[Fill in the blank with correct form of verb given in the bracket]

10) In the evening we will \_\_\_\_\_.

[Complete the above sentence using a suitable phrase]

11) Many children are \_\_\_\_\_ (swim) in the pool.

[Fill in the blank by adding 'ing' to the verb]

12) The generous king distributed gold coins \_\_\_\_\_ the poor.

[Fill in the blank with 'among' or 'between']

**B] Write an application to the Principal of your school asking for leave. (3)**

**C] Write an essay on the following topic : (4)**

'Our Annual Sports Day'

**All the best**

Thakur Educational Trust's (Regd.)  
**THAKUR VIDYA MANDIR HIGH SCHOOL & JUNIOR COLLEGE**  
**II Terminal Re-examination 2016-17**  
**Subject : English**

Std: III  
DATE - 09/02/2017

MARKS: 80  
Time : 2.45 hrs

**QIA] Fill in the blanks :**

**(6)**

- 7) There lived two little frogs in a \_\_\_\_\_ little pond.
- 8) Sindbad set sail with a company of \_\_\_\_\_.
- 9) The animals had a \_\_\_\_\_ idea.
- 10) The \_\_\_\_\_ in a robot enable the robot to perform certain action in certain ways.
- 11) The king set off into the forest to catch the \_\_\_\_\_.
- 12) The body of a robot is made of \_\_\_\_\_.

**B] Match the columns :**

**(5)**

- | <b>A</b>         | <b>B</b>            |
|------------------|---------------------|
| 6) Swans         | a) mechanical parts |
| 7) Horses        | b) very kind        |
| 8) generous      | c) having no value  |
| 9) worthless     | d) glide            |
| 10) robot's body | e) trot             |

**C] State whether the following statements are true or false:**

**(5)**

- 1) There aren't any plants in the sea.
- 2) The king was grateful to the stag.
- 3) The robbers never went back to the house.
- 4) The rainy season lasted forever.
- 5) The girl felt that nobody loved her.

**D] Write the following things from the smallest to the biggest:**

**(2)**

- 1) letter – word – book shop – story – story book – paragraph – sentence
- 2) grain of corn – field – plant – stalk – ear of corn

**E] Name the following:**

**(2)**

- 1) The outer parts of a city or town \_\_\_\_\_
- 2) A person who participates in one activity \_\_\_\_\_

**QII A] Write the opposites of :**

**(6)**

- 1) quite x
- 2) dark x
- 3) worthless x
- 4) happily x
- 5) buy x
- 6) cruel x

**B] Write a rhyming word for the following :**

**(6)**

- 1) stain -
- 2) wood -
- 3) rabbits -
- 4) white -
- 5) tree -

6) wrong -

**C] Frame a sentence of your own with the help of the following phrases :** (4)

- 1) for many days -
- 2) last for ever -
- 3) the sooner the better -
- 4) after a while -

**D] Answer the following questions in one word :** (4)

- 5) Who is left behind in the school ?
- 6) What was the king fond of ?
- 7) Which body part digests the food ?
- 8) Name any one mechanical part of a robot ?

**QIII A] Add 'ly' to the following words :** (4)

- 5) strange -
- 6) immediate -
- 7) ready -
- 8) deep -

**B] Use two or more letters from the given words to make two other words :** (4)

- 1) encouraged -
- 2) motherland -
- 3) merchandise -
- 4) immediately -

**C] Answer the following questions in one sentence each :** (6)

- 7) Whom did the poor old woman live with ?
- 8) What order did the captain give his men ?
- 9) What did the cock see from the top of the tree ?
- 10) What was the king fond of ?
- 11) Why does the sea water turn blue ?
- 12) What is an island ?

**D] Answer the following questions in brief :** (6)

- 1) What does this teacher think about her students ?
- 2) What do the children do when school is over for the day ?
- 3) Why did the donkey have to leave his master's house ?

## Grammar

**QIV A] Do as directed :** (13)

- 13) A bird is sitting \_\_\_\_\_ a branch.

[Fill in the blank with a suitable preposition]

- 14) My best friend stays next to my house.

[Underline the subject in the above sentence]

- 15) Mother is not at home.

[Rewrite the above sentence using the short form of the underlined word]

- 16) The sun shone. The birds chirped merrily.

[Rewrite the above sentence using a suitable conjunction]

- 17) Fill in the blanks with suitable articles.

(iii) \_\_\_\_\_ giraffe is the tall animal.

(iv) It belongs to \_\_\_\_\_ officer who is retired.

- 18) Lata doing what is

[Rearrange the words and rewrite the above sentence using proper punctuation]

19) Write the correct adjective forms in the blanks :

soft- \_\_\_\_\_

20) Write the past tense form of the following verbs :

(i) find - (ii) look -

21) Anne \_\_\_\_\_ a red balloon. (has/have)

[Fill in the blank with correct form of verb given in the bracket]

22) In the evening we will \_\_\_\_\_.

[Complete the above sentence using a suitable phrase]

23) The children are \_\_\_\_\_ in the garden. (play)

[Fill in the blank by adding 'ing' to the verb]

24) There was a quarrel \_\_\_\_\_ the cats.

[Fill in the blank with 'among' or 'between']

**B] Write an application to the Principal of your school asking for leave. (3)**

**C] Write an essay on the following topic : (4)**

'Our Annual Sports Day'

**All the best**

Thakur Educational Trust's (Regd.)  
**THAKUR VIDYA MANDIR HIGH SCHOOL & JUNIOR COLLEGE**  
**II Terminal Re-examination 2016-17**  
**Subject : Maths**

Std: III  
DATE : 14 /02 /2017

MARKS: 90  
Time : 2 hrs 45 mins

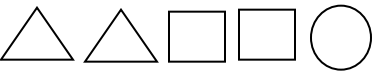
**Q1. A] Fill in the blanks :** (6)

- 1) 12 T means \_\_\_\_ H \_\_\_\_ T.
- 2)  $7 \times 9 = 9 \times$  \_\_\_\_.
- 3)  $6 \times 10 =$  \_\_\_\_.
- 4) The number to be divided is the \_\_\_\_.
- 5) The difference between 300 and 200 is \_\_\_\_.

**B] Match the columns :** (5)

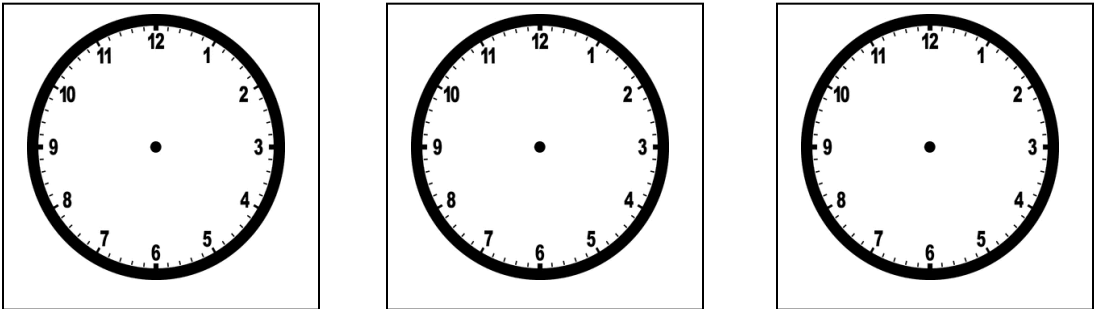
**A**

**B**

- 1) 4 : 05
  - 2) 6 T X 5 T
  - 3) 3, 2 times
  - 4)  $49 \div 7$
  - 5) 
- a)  $3 \times 2$
  - b) 7
  - c) 5 minutes past 4
  - d) 221
  - e) 30 H

**C] Do as directed :**

**1) Write the time that each clock shows.** (3)



**2) Draw any two open figures and any two closed figures of your choice.** (4)

Open figure

Closed figure

**3) Using the first fact, find the next product.** (2)

a)  $8 \times 2 = 16$

$8 \times 3 = ?$

**4) Divide using repeated subtraction.**

**(4)**

a)  $15 \div 5$

b)  $32 \div 8$

### 5) Multiply

**(3)**

a)  $\begin{matrix} 6 \\ \times 5 \\ \hline \end{matrix}$


b)  $\begin{matrix} 9 \\ \times 7 \\ \hline \end{matrix}$

c)  $\begin{matrix} 3 \\ \times 4 \end{matrix}$

**6) Draw a dotted line of symmetry:**

**(3)**

a)

b) 

c) **B**

**7) Arrange vertically and solve :**

**(4)**

a)  $468 + 71 + 53$

b)  $322 - 112$

**8) Multiply using the lattice method.**

**(4)**

a)  $43 \times 2$

b)  $26 \times 4$

**9) Complete the given pattern.**

**(3)**

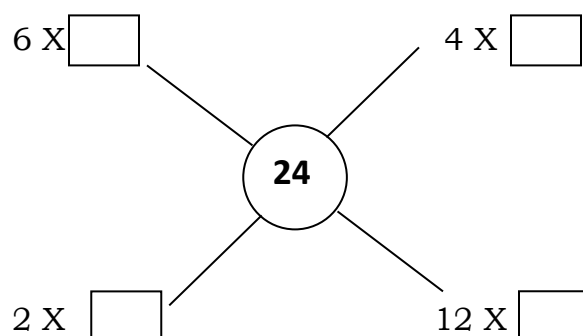
a)  \_\_\_\_\_

b)  $\Downarrow \Downarrow \rightleftharpoons \Uparrow \Uparrow \leftrightsquigarrow$  \_\_\_\_\_

c) 11 22 33 44                                

**10) Complete the boxes.**

**(2)**



**Q2. A] Arrange vertically and add :**

**(10)**

a)  $124 + 364$

b)  $200 + 10 + 1$

c)  $538 + 12 + 60$

d)  $699 + 1$

**B] Multiply :**

**(4)**

a)  $\begin{matrix} 2 & 4 \\ \times & 6 \end{matrix}$

$$\begin{array}{r} \text{b) } 90 \\ \times 3 \\ \hline \end{array}$$

### C) Arrange vertically and subtract

**(10)**

a)  $322 - 112$

b)  $899 - 523$

c)  $65 - 28$

d)  $245 - 36$



**Q3. A] Arrange horizontally and add :**

**(6)**

- a)  $631 + 321$
- b)  $501 + 185$
- c)  $700 + 9$

**B] Divide :**

**(4)**

- a)  $25 \div 5$
- b)  $64 \div 8$

**C] Arrange horizontally and subtract :**

**(4)**

- a)  $345 - 243$
- b)  $504 - 201$

**Q4. Solve the following :**

**(9)**

- a) Meenu invited 80 friends to the party. 25 of them could not come. How many friends came to her party?
- b) One shirt has 7 buttons. How many buttons are there on 4 such shirts?
- c) In a Library, there are 600 Maths books, 250 English books and 425 Science books. How many books are there in all?


**All the best**

Thakur Educational Trust's (Regd.)  
**THAKUR VIDYA MANDIR HIGH SCHOOL & JUNIOR COLLEGE**  
**II Terminal Examination 2016-17**  
**Subject : Maths**

Std: III  
DATE : 02 /02 /2017

MARKS: 90  
Time : 2 hrs 45 mins

**Q1. A] Fill in the blanks :** (6)

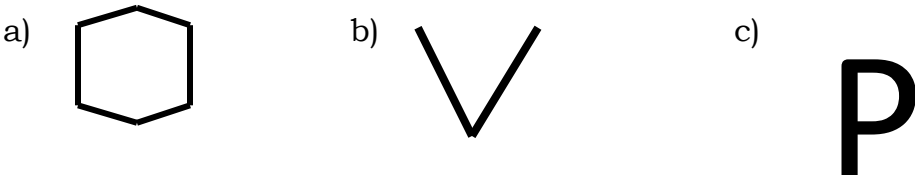
- 6) The number by which we divide is the \_\_\_\_\_.
- 7)  $50 \times 10 =$  \_\_\_\_\_.
- 8) A square has \_\_\_\_\_ number of symmetrical lines.
- 9)  = \_\_\_\_\_. (Write the number they form)
- 10) The difference between 500 and 100 is \_\_\_\_\_.
- 11) Eight nines are \_\_\_\_\_.

**B] Match the columns :** (5)

- | A                              | B             |
|--------------------------------|---------------|
| 1) 1 hour                      | a) 15 T       |
| 2) $12 \div 3$                 | b) 60 minutes |
| 3) $4 \times 50$               | c) 4          |
| 4) 2, five times               | d) 200        |
| 5) $9 \text{ T} + 6 \text{ T}$ | e) 10         |

**C] Do as directed :**

**1) Draw a line of symmetry, if any, for the following.** (3)



**2) Complete the given pattern.** (3)

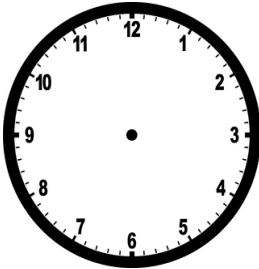
- |       |    |    |       |       |
|-------|----|----|-------|-------|
| a) AB | CD | EF | _____ | _____ |
| b) 3  | 6  | 9  | _____ | _____ |
| c) 10 | 8  | 6  | _____ | _____ |

**3) Multiply** (3)

- |   |   |   |
|---|---|---|
| a) $\begin{array}{r} 2 \\ \times 4 \\ \hline \end{array}$ | b) $\begin{array}{r} 9 \\ \times 3 \\ \hline \end{array}$ | c) $\begin{array}{r} 7 \\ \times 4 \\ \hline \end{array}$ |
| _____   | _____   | _____   |
| _____   | _____   | _____   |

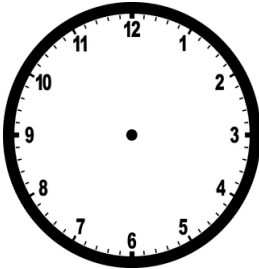
4) Write the time that each clock shows. (3)

a)




---

b)



---

c)



---

5) Multiply using the lattice method. (4)

a)  $81 \times 5$

b)  $14 \times 23$

6) Divide using repeated subtraction. (4)

a)  $20 \div 5$

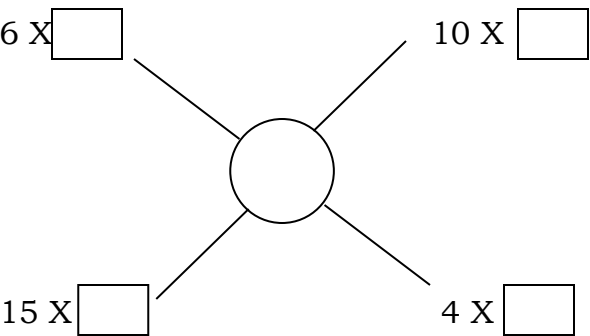
b)  $49 \div 7$

7) Using the first fact, find the next product. (2)

a)  $9 \times 4 = 36$

$9 \times 5 = ?$

8) Complete the boxes. (2)



9) Arrange vertically and solve : (4)

a)  $356 + 65$

b)  $650 - 345$

10) Draw any two open figures and any two closed figures. (4)

Q2. A] Arrange vertically and add : (10)

a)  $295 + 26 + 48$

b)  $749 + 126$

c)  $702 + 201$

d)  $602 + 91$

B] Multiply : (4)

a)  $\begin{array}{r} 24 \\ \times 2 \\ \hline \end{array}$

b)  $\begin{array}{r} 61 \\ \times 3 \\ \hline \end{array}$

**C] Arrange vertically and subtract**

**(10)**

- a)  $702 - 365$                       b)  $690 - 254$   
c)  $916 - 499$                       d)  $581 - 96$

**Q3. A] Arrange horizontally and add :**

**(6)**

- d)  $324 + 423$   
e)  $25 + 32$   
f)  $421 + 351$

**B] Divide :**

**(4)**

- a)  $25 \div 5$                               b)  $69 \div 8$

**C] Arrange horizontally and subtract :**

**(4)**

- a)  $619 - 318$                               b)  $420 - 220$

**Q4. Solve the following :**

**(9)**

- d) The cost of one ice-cream cone is ₹ 18. What is the cost of 6 such ice-cream cones?
- e) At the book fair, 534 books were sold on the first day. On the second day 156 book were sold. How many less books were sold on the second day?
- f) There are 356 girls and 418 boys in a school. How many students are there in all?

**All the best**

Thakur Educational Trust's (Regd.)  
**THAKUR VIDYA MANDIR HIGH SCHOOL & JUNIOR COLLEGE**  
**II Terminal Re-examination 2016-17**  
**Subject : E.V.S**

Std: III  
DATE - 10/ 02 /2017

MARKS: 80  
Time : 2.45 hrs

**QI A Fill in the blanks:**

**12**

1. There are many tiny \_\_\_\_\_ on the leaves.
2. Unwanted substances leave our body through \_\_\_\_\_.
3. We are \_\_\_\_\_ to buy foodstuffs that we see in advertisement .
4. As \_\_\_\_\_ goes on continuously, a sleeping man's chest can be seen going up and down. .
5. \_\_\_\_\_ look real but the teeth in this are actually false .
6. \_\_\_\_\_ are needed to build co-operation.
7. Going to school on time teaches us \_\_\_\_\_.
8. Public services are meant for \_\_\_\_\_.
9. Animals \_\_\_\_\_ in water.
10. No two persons are exactly \_\_\_\_\_.
11. A quarrel should be resolved \_\_\_\_\_.
12. People from \_\_\_\_\_ wash their clothes near river.

**B] Match the pairs :**

**5**

**A**

**B**

- |                   |                                       |
|-------------------|---------------------------------------|
| 1. Butterfly      | a) start falling at the age of 7 or 8 |
| 2. Water          | b) parts of a leg                     |
| 3. Milk teeth     | c) Deliver letters                    |
| 4. Toes and knee  | d) Nectar                             |
| 5. Postal service | e) keeps the blood thin               |

**C] Name the following :**

**5**

1. Organs that are on the outside of our body.
2. Animal that eats Bengal gram
3. Place where we deposit money.
4. Local government that runs the administration of a village.
5. Part of the plant that absorbs water from the soil.

**D] Find the odd one out :**

**5**

1. Curry, Porridge, Soup, Dhokla
2. Tiger, Deer, Nilgai, Bison
3. upperarm, forearm, foot, fingers
4. library, lunch, playground, computer lab
5. drinking, washing, writing, bathing

**Q II A] State true or false :**

**5**

1. Animals have to cook their food.
2. One must eat all the food preparations made at home.
3. Our thumb is one of the main parts of the body.
4. If teeth are dirty, we fall ill.
5. We must not go to school regularly.

<b>B] Write down the methods of cooking the following dishes :</b>	<b>5</b>
<ol style="list-style-type: none"> <li>1. Dal</li> <li>2. Dhokla</li> <li>3. Karanji</li> <li>4. Papad</li> <li>5. Thalipeeth</li> </ol>	
<b>C] Which sensory organs give you the following information :</b>	<b>5</b>
<ol style="list-style-type: none"> <li>1. The flower has sweet fragrance</li> <li>2. The mango is sour</li> <li>3. The rainbow is colourful</li> <li>4. A song is being played on the radio</li> <li>5. The towel is rough</li> </ol>	
<b>D] Answer the questions in one sentence each :</b>	<b>10</b>
<ol style="list-style-type: none"> <li>1. How do fishes breath?</li> <li>2. Which parts of the body form the torso?</li> <li>3. Why is co-ordination necessary?</li> <li>4. What will happen if we do not keep ourselves clean?</li> <li>5. Why do we need air?</li> <li>6. What is service?</li> <li>7. Who takes care of us when we are ill?</li> <li>8. Why do friends quarrel?</li> <li>9. Who introduced the modern school system in India?</li> <li>10. What do you fill into a balloon when you blow in it?</li> </ol>	
<b>Q III A] Classify the following work into sydentary work and physical work :</b>	<b>5</b>
<ol style="list-style-type: none"> <li>1. Cycling</li> <li>2. Reading a book</li> <li>3. Drawing a picture</li> <li>4. Playing kho-kho</li> <li>5. Sweeping the floor</li> </ol>	
<b>B] Give reason :</b>	<b>8</b>
<ol style="list-style-type: none"> <li>1. Everyone in the family should share the work.</li> <li>2. We should not allow nails to grow.</li> <li>3. Community life is interdependent.</li> <li>4. It is easier to use gas than firewood for cooking.</li> </ol>	
<b>C] Answer the following in brief:</b>	<b>12</b>
<ol style="list-style-type: none"> <li>1. What is local government ? What are the local governments in India?</li> <li>2. How is the diet of people of Konkan ? Why ?</li> <li>3. What are the advantages (benefits) of the community life?</li> <li>4. Sate the significance of the family.</li> </ol>	
<b>D] Label the following diagram :</b>	<b>3</b>

Thakur Educational Trust's (Regd.)  
**THAKUR VIDYA MANDIR HIGH SCHOOL & JUNIOR COLLEGE**  
**III Terminal Examination 2015-16**  
**Subject : E.V.S**

Std: III  
DATE \_ 1/ 4 /16

MARKS: 80  
Time : 2.45 hrs

**QI A Fill in the blanks:**

**10**

1. \_\_\_\_\_ is the festival that marks the end of winter.
2. \_\_\_\_\_ develops from flower.
3. \_\_\_\_\_ start falling at the age of 7 or 8 .
4. No two persons are exactly \_\_\_\_\_.
5. \_\_\_\_\_ is available plenty in the sea.
6. \_\_\_\_\_ water has no colour, smell or taste.
7. In a community , we get \_\_\_\_\_.
8. There are \_\_\_\_\_ main directions.
9. A baby is given \_\_\_\_\_ to prevent diseases.
10. In the \_\_\_\_\_ season, the climate is cool and pleasant.

**B] Match the pairs :**

**6**

**A**

**B**

- |                  |                           |
|------------------|---------------------------|
| 1. India         | a) Kerala                 |
| 2. Owl           | b) helping each other     |
| 3. Summer        | c) Nation                 |
| 4. Rules         | d) nocturnal animal       |
| 5. Co- operation | e) are same for everybody |
| 6. Onam          | f) February to May        |

**C] State true or false :**

**6**

1. We can climb stairs with the help of our legs.
2. Yogurt and buttermilk are not good for our health .
3. Water is transparent.
4. The west lies opposite to south.
5. The moon cannot be seen on the day of the new moon .
6. Small babies should not be carried .

**D) Write the missing links :**

**4**

1. Cane : Weaving : \_\_\_\_\_
2. \_\_\_\_\_ : Fruit processing : Jam / Jelly
3. Cotton : \_\_\_\_\_ : Textile
4. Iron : Automobile industry : \_\_\_\_\_

**Q II A Name the following :**

**8**

1. Name of your district.
2. One ruminating animal.
3. Season that sets with thunder and lightning.
4. Part of the body that joins the head and torso.
5. Place where ice is made on a large scale.
6. Season in which we get mango pulp.
7. One festival related to agriculture.
8. Capital of India.

**B. Find the odd man out : -**

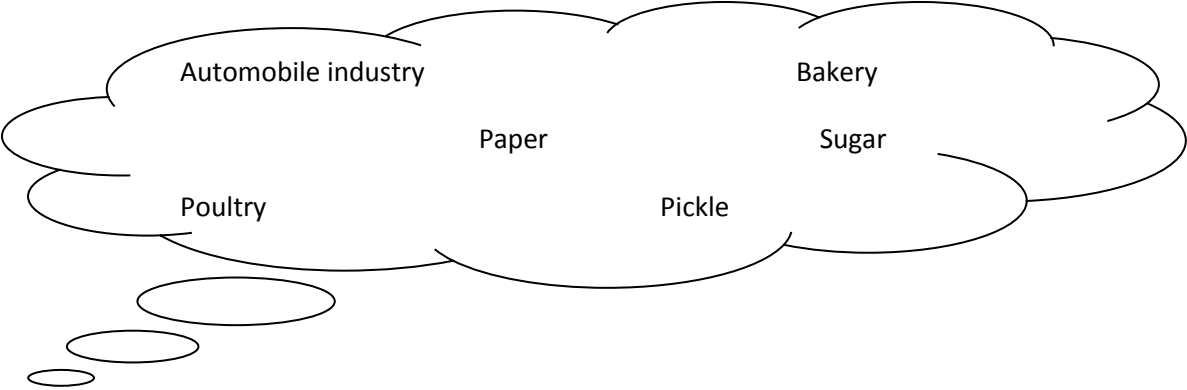
**5**

1. cycling, playing kho- kho, reading a book, dancing.
2. upper arm, nose, fore arm, wrist.

- Ice, steam, water, oil.
- Holi, Baisakhi, Bailpola, Christmas.
- Watcing T.V, playing chess, sweeping floor, drawing picture.

C. Classify into large scale industry and cottage industry.

3



D. Answer in one sentence:

10

- What do ants walking in a queue imply?
- When does a plant begin to flower?
- What are the phases of the moon?
- With whom do we live at home?
- Which is the best way to brush our teeth?
- What do the seasons indicate?
- Which part of the body form the torso?
- What is diet?
- What does a family provide?
- With whom do we share our joy and sorrow?

Q III A Give reasons:

10

- We should respect our elders.
- We study the environment.
- Birds build nests.
- We need to change types of clothes according to seasons.
- We should take care of our environment.


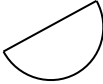
B. Answer the following in brief:

15

- Describe the features of cottage industry.
- What is rumination?
- What is germination?
- Write in brief about the importance of farming in India?
- What is the cycle of season?

C. Draw and label the missing phases of the moon :

3

<div>  </div> <div>Full moon</div>	<div> <div>?</div> <div>?</div> <div>_____</div> </div>	<div>  </div> <div>Half moon</div>
<div> <div>?</div> <div>?</div> <div>_____</div> </div>	<div> <div>?</div> <div>?</div> <div>_____</div> </div>	<div> <div>New Moon</div> </div>



प्र. 1. बारहखडी लिखिए : (Write Barahkhadi) 2

- 1) म \_\_\_\_\_  
\_\_\_\_\_
- 2) ह \_\_\_\_\_  
\_\_\_\_\_

प्र. 2. उचित उत्तर पर ☐ निशान लगाओ : (Put ☐ on correct answer) 2

- 1) चोरों को देखकर सोनू ने क्या किया ?  
☐ भाग गया    ☐ हँसने लगा    ☐ शोर मचाया
- 2) किसके पैर में काँटा चुभा था ?  
☐ सारस के    ☐ ऊँट के    ☐ बतख के

प्र. 3. वाक्य पूरे करो। (Complete the sentence) 3

- ( मोनू, साँप, लौकी )
- 1) \_\_\_\_\_ सारस के अंडे खा जाता था ।
- 2) \_\_\_\_\_ का हलवा बनाया ।
- 3) सोनू \_\_\_\_\_ दो भाई थे ।

प्र.4. किन्ही चार रंगों के नाम हिंदी में लिखिए। (Write any four colours name in Hindi) 4

1. \_\_\_\_\_ 2. \_\_\_\_\_ 3. \_\_\_\_\_
4. \_\_\_\_\_

प्र. 5. शरीर के किन्ही चार अंगों के नाम हिन्दी में लिखिए । 4

(Write any four parts of body in hindi)

1. \_\_\_\_\_ 2. \_\_\_\_\_ 3. \_\_\_\_\_
4. \_\_\_\_\_

प्र. 6. अक्षरों को जोड़कर शब्द बनाइए : (Join the letters & make a word)

4

1. प + ँ + ख = \_\_\_\_\_

2. म + ृ + ग = \_\_\_\_\_

3. द + र् + प + ण = \_\_\_\_\_


4. ब + च + च + ा = \_\_\_\_\_

प्र. 7. चित्र देखकर उनके नाम लिखिए : (See the picture and write the names)

3

( घोड़ा, तोप, अंगूर, शंख )

1)



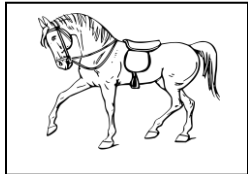
\_\_\_\_\_

2)



\_\_\_\_\_

3)



\_\_\_\_\_

प्र. 8. नीचे लिखी मात्रावाले एक-एक शब्द बनाओ :

2

(Write down one – one word of following matras)

1) ऐ ( ै ) \_\_\_\_\_

2) ऊ ( ू ) \_\_\_\_\_

प्र. 9. उचित मात्रा लगाकर शब्द पूरे करो ।

2

(Use the matras given in the bracket and correct the words)

( ै , ै , ू , ू )

तुलसी, आख, पख, वषा

प्र. 10. नीचे दिए गए अंग्रेजी अंको को हिंदी अंको और शब्दों में लिखिए ।

4

(Write down the following English numbers in Hindi numbers & words)

English numbers

Hindi numbers

Hindi words

अ) 8

\_\_\_\_\_

\_\_\_\_\_

ब) 16

\_\_\_\_\_

\_\_\_\_\_

शुभकामनाएँ

ठाकुर विद्या मंदिर हायस्कूल एण्ड ज्युनियर कॉलेज  
द्वितीय सत्र परीक्षा – 2016–17

नाम \_\_\_\_\_ वर्ग \_\_\_\_\_ कक्षा \_\_\_\_\_  
विषय – हिन्दी अंक – 30  
दिनांक : 03.02.2017 कक्षा – तीसरी समय : 1 घंटा 30 मिनट

प्र. 1. बारहखडी लिखिए : (Write Barahkhadi)

2

1) श \_\_\_\_\_

\_\_\_\_\_

2) झ \_\_\_\_\_

\_\_\_\_\_

प्र. 2. उचित उत्तर पर ☐ निशान लगाओ : (Put ☐ on correct answer)

2

1) कुएँ में कौन रहता था ?

☐ मछली ☐ साँप ☐ सारस

2) चोरों को किसने देखा ?

☐ सोनू ने ☐ मोनू ने ☐ लोगों ने

प्र. 3. वाक्य पूरे करो। (Complete the sentence)

3

( मंदिर, लोग, लौकी )

1) शोर सुनकर आसपास के \_\_\_\_\_ आ गए।

2) दोनों \_\_\_\_\_ जाते हैं।

3) \_\_\_\_\_ का हलवा बनाया।

प्र.4. किन्ही चार रंगों के नाम हिंदी में लिखिए। (Write any four colours name in Hindi)

4

1. \_\_\_\_\_ 2. \_\_\_\_\_ 3. \_\_\_\_\_

4. \_\_\_\_\_

प्र. 5. शरीर के किन्ही चार अंगों के नाम हिन्दी में लिखिए।

4

(Write any four parts of body in hindi)

1. \_\_\_\_\_ 2. \_\_\_\_\_ 3. \_\_\_\_\_

4. \_\_\_\_\_


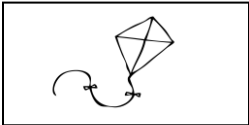

प्र. 6. अक्षरों को जोड़कर शब्द बनाइए : (Join the letters & make a word)

4

2. म + ढ + छ + र = \_\_\_\_\_
2. च + क् + र् = \_\_\_\_\_
3. थ + <sup>ँ</sup> + ल + ा = \_\_\_\_\_
4. क + ो + य + ल = \_\_\_\_\_

प्र. 7. चित्र देखकर उनके नाम लिखिए : (See the picture and write the names)

3

- ( बंदर, पतंग, मोर, तोप )
- 1)  \_\_\_\_\_
- 2)  \_\_\_\_\_
- 3)  \_\_\_\_\_

प्र. 8. नीचे लिखी मात्रावाले एक-एक शब्द बनाओ :

(Write down one – one word of following matras)

2

- 1) ऐ ( <sup>ँ</sup> ) \_\_\_\_\_
- 2) ओ ( <sup>ँ</sup> ) \_\_\_\_\_

प्र. 9. उचित मात्रा लगाकर शब्द पूरे करो ।

(Use the matras given in the bracket and correct the words)

2

- ( <sup>ँ</sup> , <sup>ँ</sup> , <sup>ँ</sup> , <sup>ँ</sup> )
- चाद, सनार, हस, धप

प्र. 10. नीचे दिए गए अंग्रेजी अंको को हिन्दी अंको और शब्दों में लिखिए ।

(Write down the following English numbers in Hindi numbers & words)

4

English numbers	Hindi numbers	Hindi words
अ) 7	_____	_____
ब) 12	_____	_____

विषय – मराठी

दिनांक : 11.02.2017

नाव :

इयत्ता – तिसरी

तुकडी –

गुण – 30

वेळ – 1 तास 30 मि.

पट क :

प्र. 1ला. रिकाम्या जागी योग्य स्वर लिहा. (Fill in the blanks with correct swar)

3

अ आ \_\_\_\_\_ उ \_\_\_\_\_ ऋ ए \_\_\_\_\_ औ \_\_\_\_\_ अः

प्र. 2रा. रिकाम्या जागी योग्य व्यंजन लिहा. (Fill in the blanks with the correct vyanjan)

2

प \_\_\_\_\_

प्र. 3रा. रिकाम्या जागी योग्य अक्षर लिहा. (Fill in the blanks with the correct letter)

4

1) व् + ई = \_\_\_\_\_

2) म् + \_\_\_\_\_ = मं

3) ब् + \_\_\_\_\_ = बौ


4) \_\_\_\_\_ + ओ = गो

प्र. 4था. खालील चित्र व शब्दांच्या योग्य जोड्या जुळवा.

5

(Match the picture with their proper words)

1) फणस



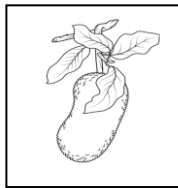
2) पाल



3) छत्री



4) टेकडी



5) फुगे



प्र. 5वा.अ) खालील इंग्रजी शब्दांचे अर्थ मराठीत लिहा.

4

(Write the meanings of the following words in Marathi)

1) Rain - \_\_\_\_\_

2) work - \_\_\_\_\_

3) to sell - \_\_\_\_\_

4) Matchbox- \_\_\_\_\_

प्र. 5वा.ब) खालील मराठी शब्दांचे अर्थ इंग्रजीत लिहा.

4

(Write the meanings of the following words in English)

1) चेंडू – \_\_\_\_\_

2) मदत – \_\_\_\_\_

3) कागद – \_\_\_\_\_

4) शाळा – \_\_\_\_\_

प्र. 5वा.क) वचन बदला.

3

(Write the plural form of the following words)

1) बदक – \_\_\_\_\_

2) ससा – \_\_\_\_\_

3) गाजर – \_\_\_\_\_

प्र. 6वा. खालील प्रश्नांची एका शब्दात उत्तरे लिहा.

5

(Answer in one word)

1) खिडकी कोणी उघडली ? \_\_\_\_\_

2) जंगलात कोण आजारी पडले होते ? \_\_\_\_\_

3) शुक्रवारी मुली कोठे जातात ? \_\_\_\_\_

4) धरणाचे पाणी कोठे जाते ? \_\_\_\_\_

5) कागदाचा पक्षी कोणी बनवला ? \_\_\_\_\_

हार्दिक शुभेच्छा